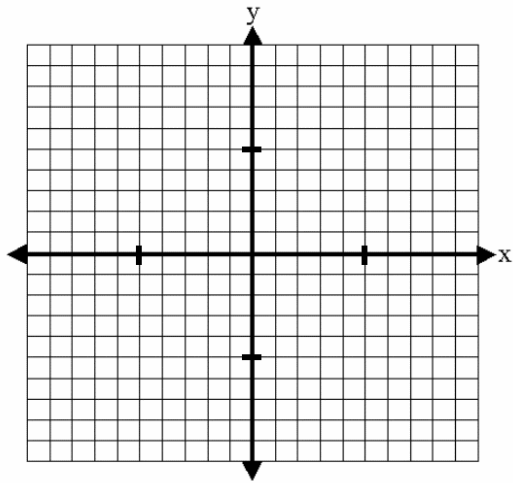


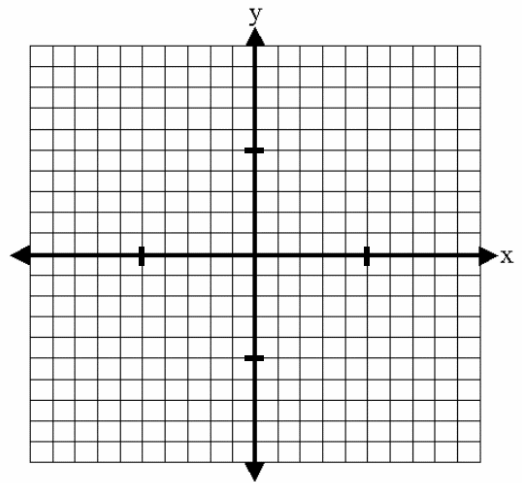
OBJECTIVE: To be able to rewrite equations into slope-intercept form.

Rewrite each equation into slope-intercept form and graph each equation.

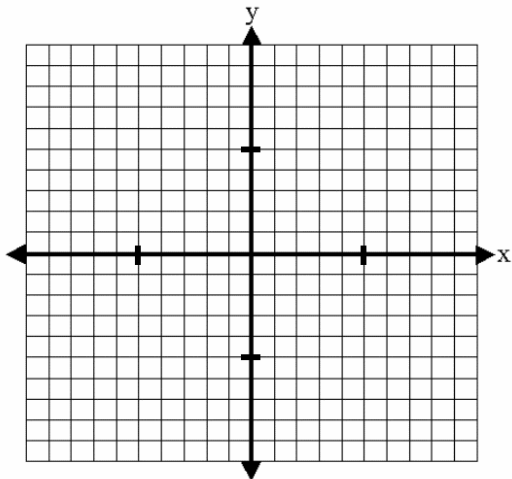
1. $3x + 5y = 30$



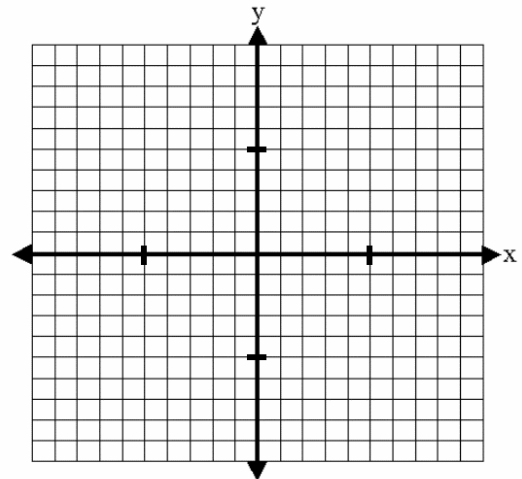
2. $4x + y = 2$



3. $-5x - 2y = 10$



4. $2x - 3y = -12$



Jumbled Answers

$$y = \frac{2}{3}x + 4$$

$$y = -4x + 2$$

$$y = -\frac{3}{5}x + 6$$

$$y = -\frac{5}{2}x - 5$$